

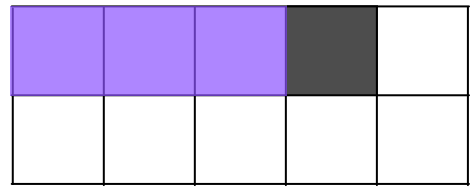
NAME: _____

10 frame Roll and Add

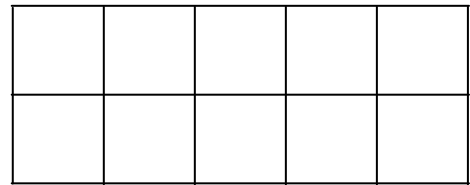


Use a die and roll a number to fill in the first space of each equation.

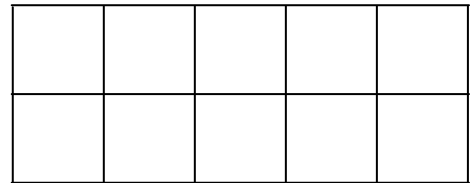
3 + **1** = 4



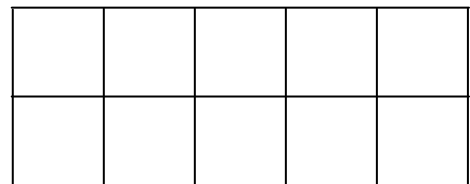
____ + **1** = ____



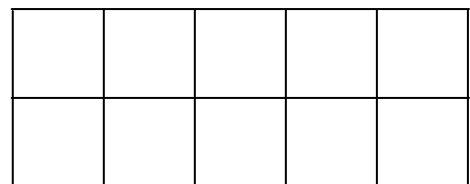
____ + **1** = ____



____ + **1** = ____



____ + **1** = ____



Score: __/5

NAME: _____

10 frame Roll and Add



Use a die and roll a number to fill in the first space of each equation.

___ + 2 = ___

___ + 2 = ___

___ + 2 = ___

___ + 2 = ___

___ + 2 = ___

Score: ___/5

NAME: _____

10 frame Roll and Add



Use a die and roll a number to fill in the first space of each equation.

___ + 3 = ___

___ + 3 = ___

___ + 3 = ___

___ + 3 = ___

___ + 3 = ___

Score: __/5

NAME: _____

10 frame Roll and Add



Use a die and roll a number to fill in the first space of each equation.

____ + 4 = ____

____ + 4 = ____

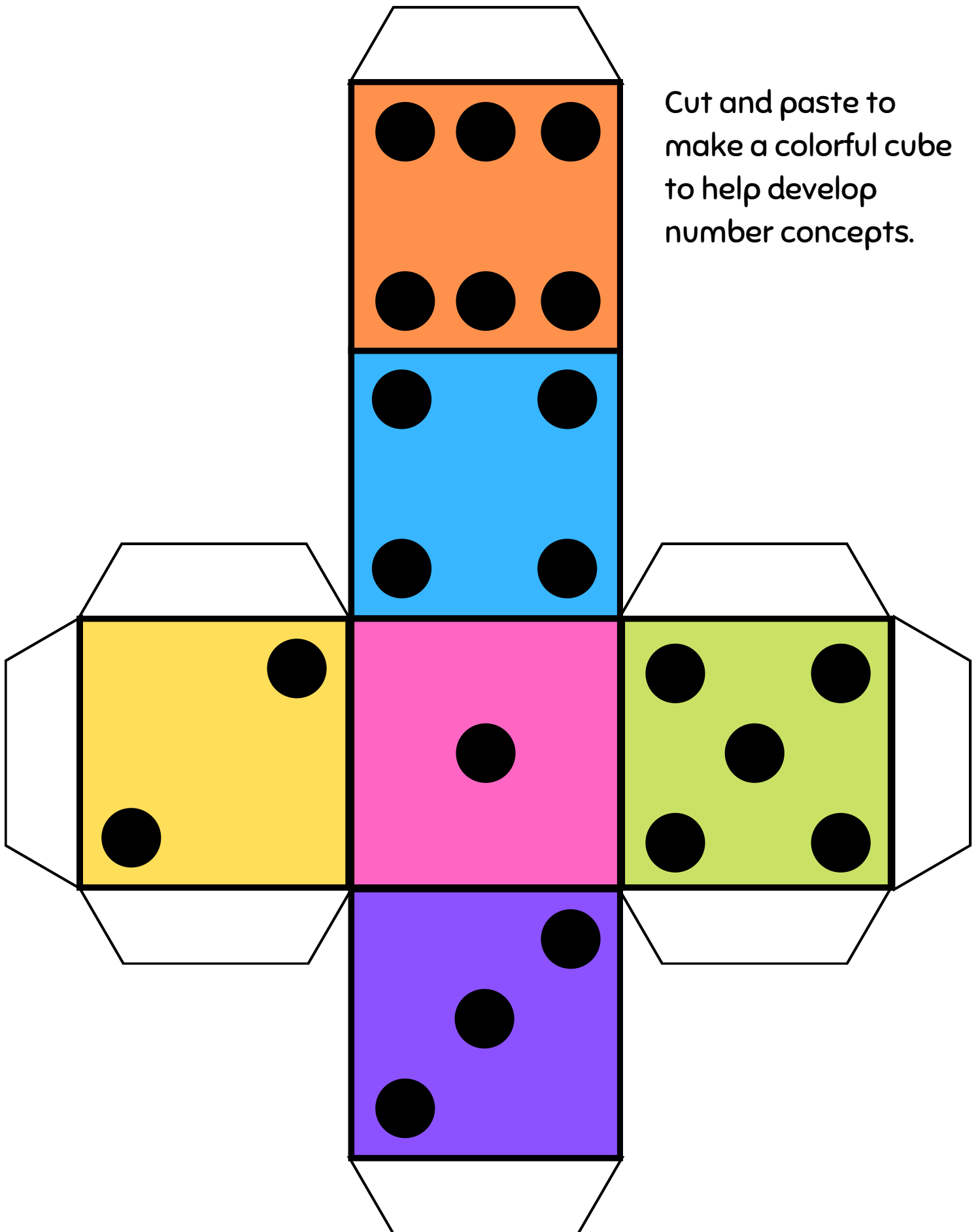
____ + 4 = ____

____ + 4 = ____

____ + 4 = ____

Score: __/5

6-Sided Dice



Cut and paste to
make a colorful cube
to help develop
number concepts.

Roll and Add Champion Diploma




Congratulations!

NAME

You have completed all 5 Roll and
Add worksheets.

With a score of: __/20

DATE ___ / ___ / ___


Team
worksheetme.com